

Math Unit 1 Test Review Sheet

Date of Test _____

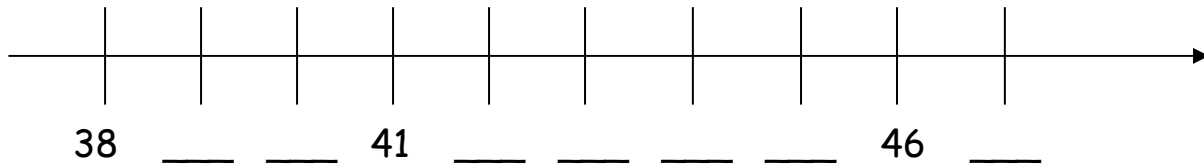
Name _____

1. Make 22 tally marks _____

2. Write the amount: _____



3. Fill in the missing numbers.




4. Write two more names for 8:

$4 + 4 = 8$ _____


$10 - 2 = 8$ _____

5. Write the time:



_____ : _____

Draw the hands to show 2:30.



6. Fill in the missing numbers.

46		

		53